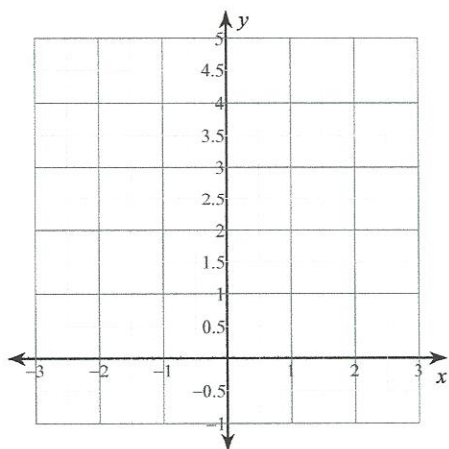


Quadratische Funktionen - QF1 (Zeichnen)

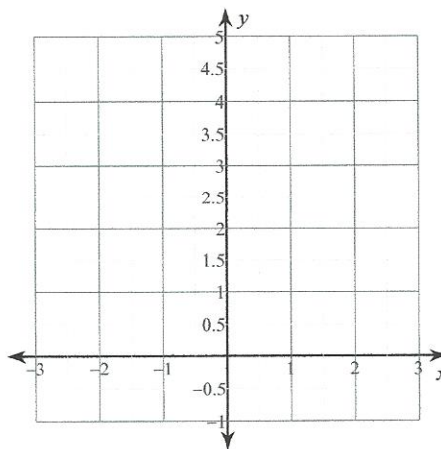
Name _____ Datum _____

Zeichne den Graphen der Quadratischen Funktion!

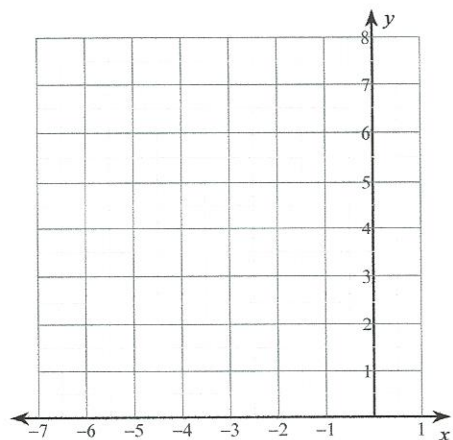
1) $f(x) = x^2$



2) $f(x) = x^2$



3) $f(x) = x^2 + 6x + 12$



4) $f(x) = x^2 - x + 4$

