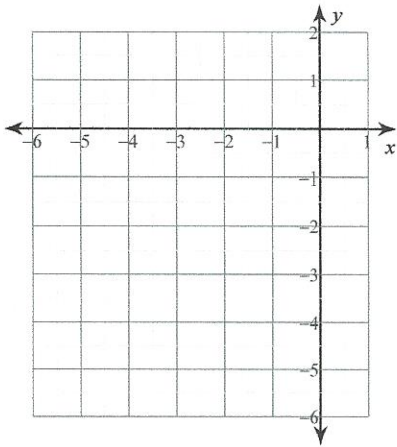


Quadratische Funktionen - QF2 (Zeichnen)

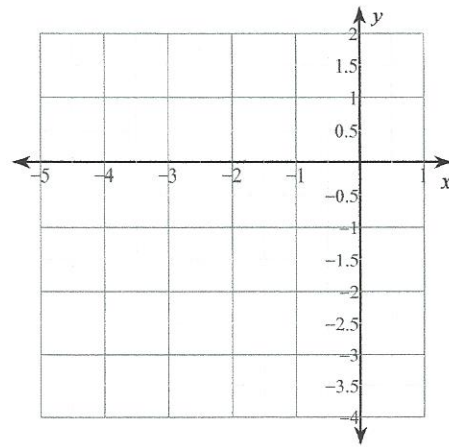
Name _____ Datum _____

Zeichne den Graphen jeder Quadratischen Funktion!

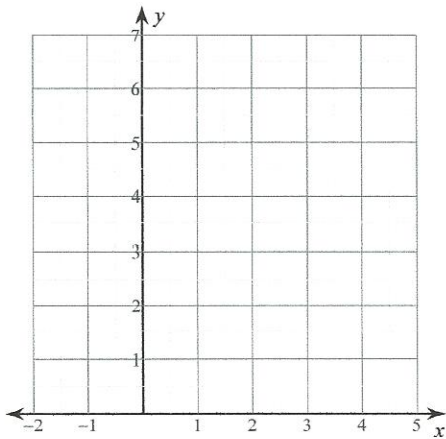
1) $y = (x + 4)^2 - 4$



2) $y = (x + 3)^2 - 3$



3) $y = \left(x - \frac{3}{2}\right)^2 + 2$



4) $y = \left(x + \frac{3}{2}\right)^2 + \frac{7}{4}$

