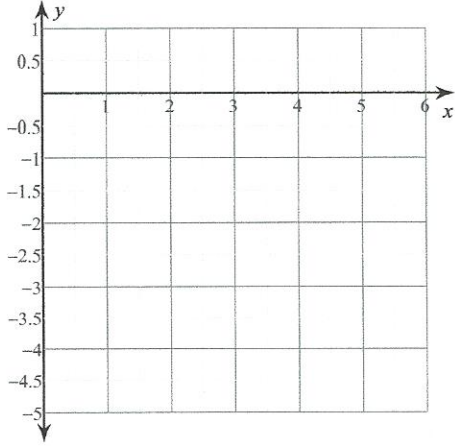


Quadratische Funktionen - QF3 (Zeichnen)

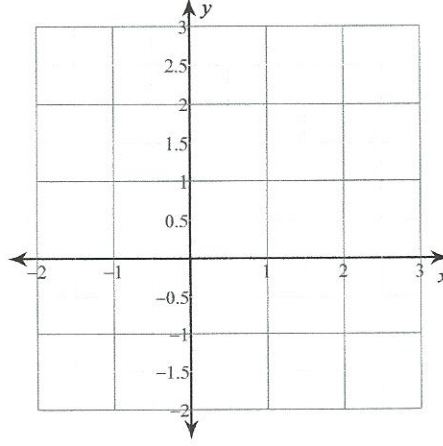
Name _____ Datum _____

Zeichne den Graphen jeder Quadratischen Funktion!

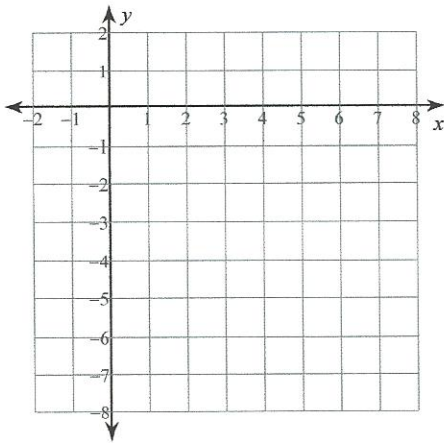
1) $y + 4 = \left(x - \frac{7}{2}\right)^2$



2) $y + \frac{5}{4} = \left(x - \frac{1}{2}\right)^2$



3) $-\frac{1}{2}(y - 1) = (x - 3)^2$



4) $-\frac{1}{2}(y + 1) = (x + 1)^2$

