

# Einfache Trigonometrie - TRIG 1 (sin, cos, tan)

Name \_\_\_\_\_ Datum \_\_\_\_\_

**Bestimme die Werte!**

1)  $\sin 85^\circ$

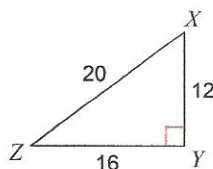
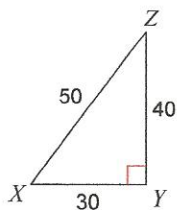
2)  $\sin 65^\circ$

3)  $\tan 72^\circ$

4)  $\cos 25^\circ$

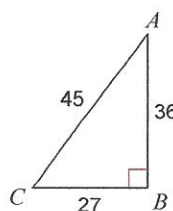
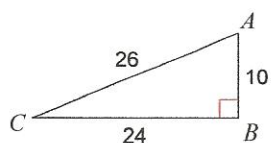
5)  $\sin X$

6)  $\sin Z$



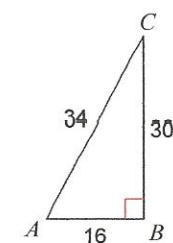
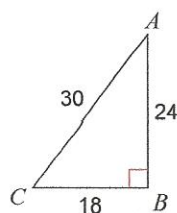
7)  $\tan C$

8)  $\tan C$



9)  $\cos C$

10)  $\cos A$



11)  $\tan C$

12)  $\sin Z$

