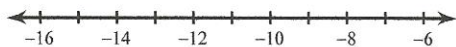


Ungleichungen - UG1

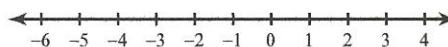
Name _____ Datum _____

Löse jede Ungleichung in zeichne die Lösung auf dem Zahlstrahl!


1) $k - 4 \leq -13$



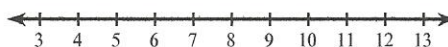
2) $-3p < -3$



3) $x + 1 \leq -5$



4) $6 + v > 11$




5) $a - 2 \geq 0$



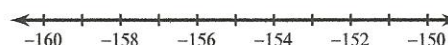
6) $x - 5 < -1$



7) $\frac{r}{26} \leq 11$




8) $\frac{m}{6} < -26$



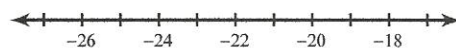
9) $23x > -276$



10) $x + 26 \leq 38$



11) $6 + n < -14$



12) $14 \geq \frac{n}{3}$

