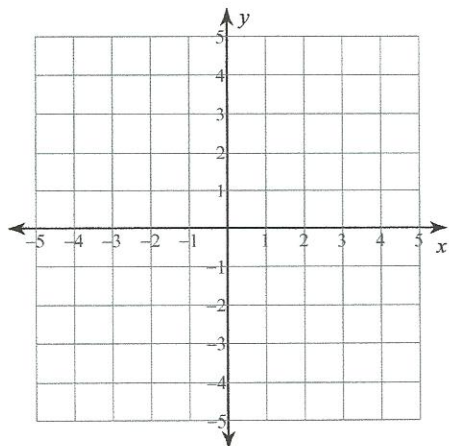


# Ungleichungssysteme - Zeichnen

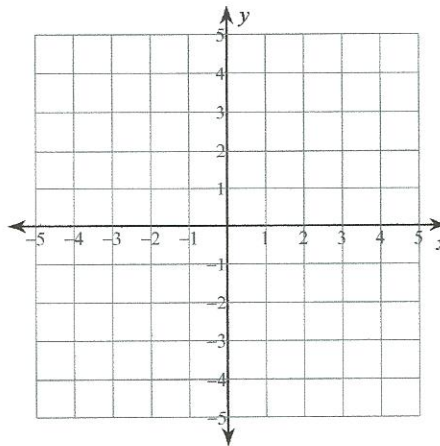
Name \_\_\_\_\_ Datum \_\_\_\_\_

## Zeichne Ungleichungssysteme!

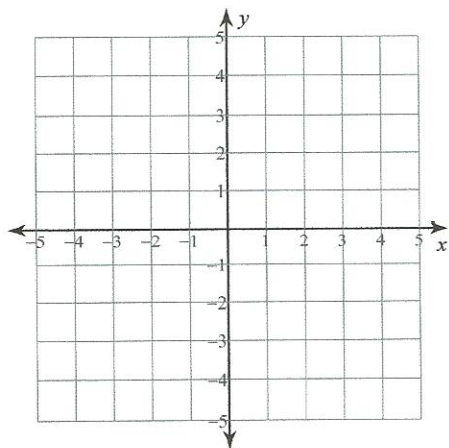
1)  $3x - 2y > -2$   
 $x - 2y \geq 2$



2)  $6x - y \geq -3$   
 $x - y \leq 2$



3)  $y < -\frac{1}{2}x + 2$   
 $y \geq -3x - 3$



4)  $y > -\frac{1}{2}x + 2$   
 $y \geq -\frac{5}{2}x - 2$

